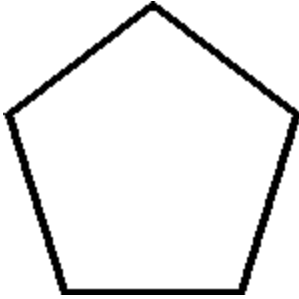


Name: _____

SYMMETRY

1) How many lines of symmetry for the following shapes.

a) A regular pentagon: _____

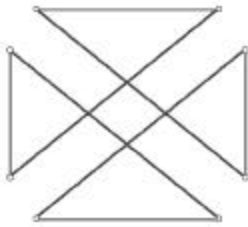


b) A decagon: _____



2) Name the axis or axes, x-axis, y-axis, or both axes, of symmetry of the following:

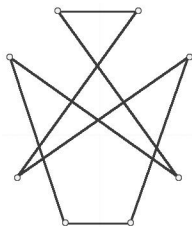
a) _____



b) _____



c) _____



d) _____

