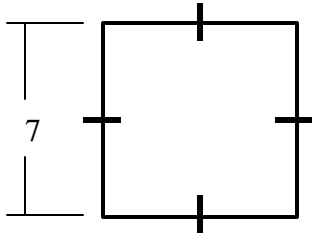


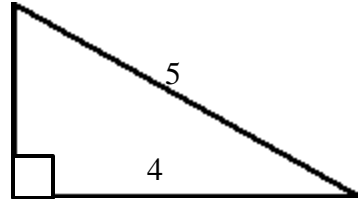
AREA

1) Calculate the perimeter and area of the following polygons:

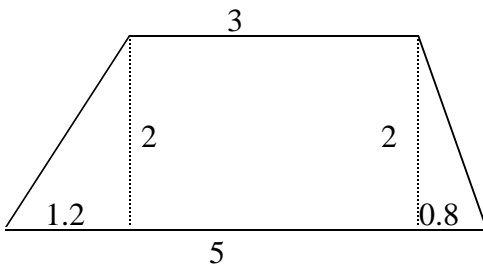
a) $P =$ _____ $A =$ _____



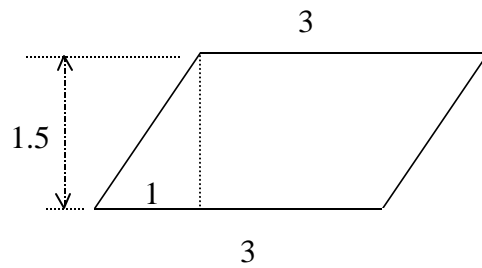
b) $P =$ _____ $A =$ _____



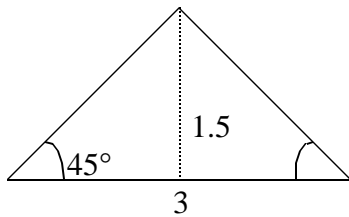
c) $P =$ _____ $A =$ _____



d) $P =$ _____ $A =$ _____



e) $P =$ _____ $A =$ _____



f) $P =$ _____ $A =$ _____

