


POLYGONS

1) Name the following polygons:

a) _____




b) _____



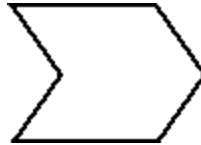
c) _____



d) _____



e) _____



f) _____

2) Write *always*, *sometimes* or *never* in the blanks below.

- A rhombus is _____ a parallelogram.
- A square is _____ a quadrilateral.
- A rhombus is _____ a square.
- Regular polygons _____ have equal length sides.
- Quadrilaterals with two parallel sides are _____ parallelograms.
- Polygons with all right angles are _____ squares.
- A polygon with only three equal length sides is _____ a right triangle.
- The Sun _____ rises in the east.