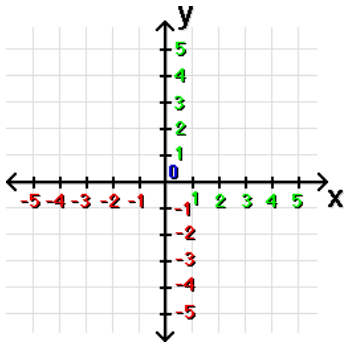


INTRODUCTION

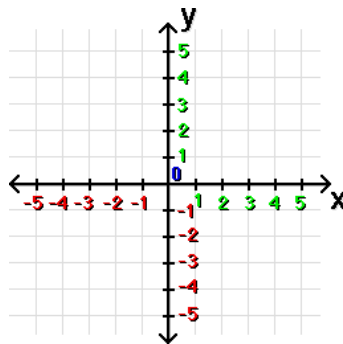
POINTS

1) Plot the following points:

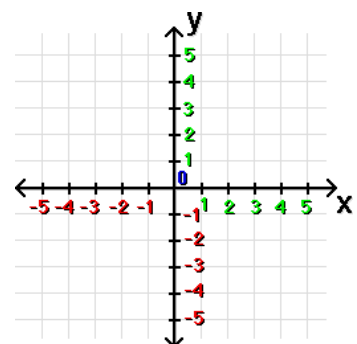
a) $(4, 3)$



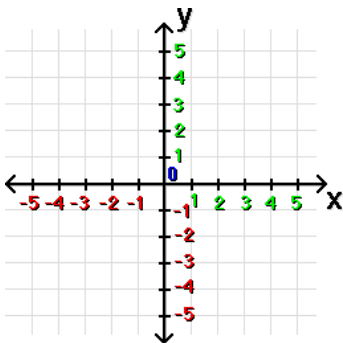
b) $(0, 3)$



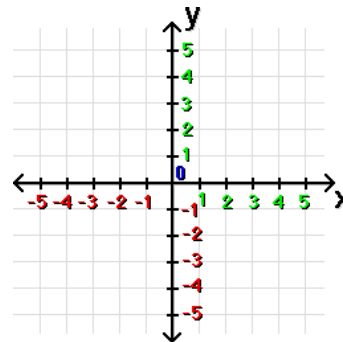
c) $(1, -3)$



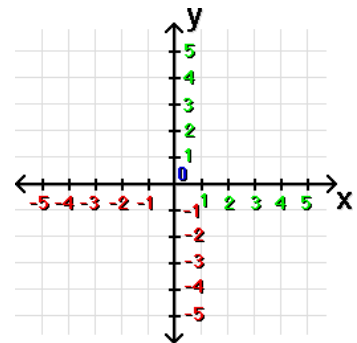
d) $(-2, 3)$



e) $(-3, -4)$

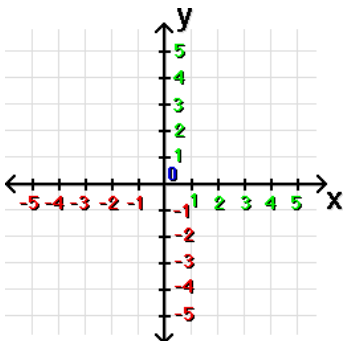


f) $(-5, 0)$

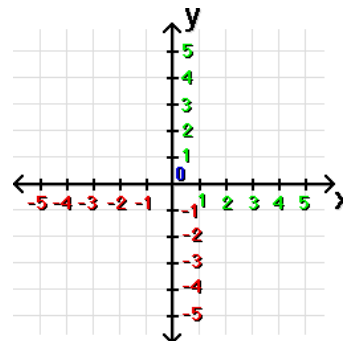


2) Translate the following points:

a) $(-2, 3)$ translated by $(-1, -4)$



b) $(4, 5)$ translated by $(-7, -9)$



c) $(0, -2)$ translated by $(-3,$

